

# Year 5

## Place Value Assessment

### Answers

- 1 What number is represented below?

10,000s	1,000s	100s	10s	1s
10,000	1,000 1,000 1,000 1,000 1,000 1,000	100 100 100 100 100 100 100 100 100	10	1 1 1 1 1

16,915

Georgia says that the number is multiple of 5  
Is Georgia correct? Explain your answer.

Yes she is correct because the number has a multiple  
of 5 in its 1s place.

Yes because it is in the 5 times table.

- 2 Complete the missing numbers.

$$47,603 = 40,000 + \underline{7,000} + 600 + 3$$

$$\underline{50,374} = 50,000 + 300 + 70 + 4$$

$$80,000 + 7,000 + \underline{1,300} = 88,300$$



- 3 In a game, people have some play money to buy houses.  
Each person starts with the following play money.

£100,000	£10,000	£1,000
£100,000	£10,000	£1,000
£100,000	£10,000	
£100,000	£10,000	
	£10,000	

How much money do they each start with?

£ 452,000

- 4 Circle **all** the numbers that round to 4,750 to the nearest 10

4,752 748 4,748 4,745 4,755

- 5 What is the missing number?

305,700		
300,000	?	700

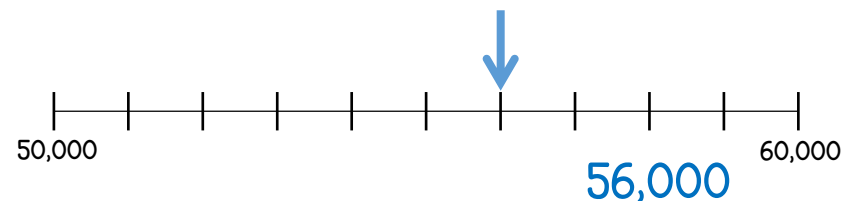
5,000

- 6 Which is the greater number? Explain your answer.

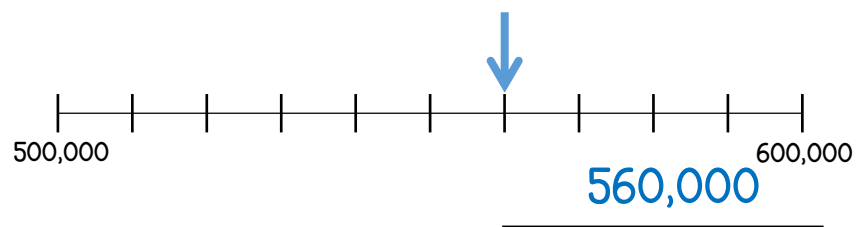
XCIX CX

XCIX is 99 and CX is 110. Explanation needed for the mark.

- 7 What numbers are shown by the arrows?




1 mark




1 mark

- 8 Complete the following using  $<$ ,  $>$  or  $=$

12,900  $>$  2,980

57,000  $<$  570,000

999,999  $<$  1 million

3 marks

- 9 Arrange the digit cards to make an **odd** number between 70,000 and 100,000

1 4 6 8 9

Range of possible answers. All will be begin with 8 or 9.

Round your number to the nearest 1,000

Round your number to the nearest 10,000

1 mark

1 mark

1 mark

- 10 Complete the missing numbers.

19	10,019	20,019	30,019	40,019	50,019
----	--------	--------	--------	--------	--------

1 mark

- 11 Put the following weights in order starting with the smallest.

A 700,000 kg

B 87,000 kg

C Ninety-four thousand kg

D 399,458 kg

B  
smallest

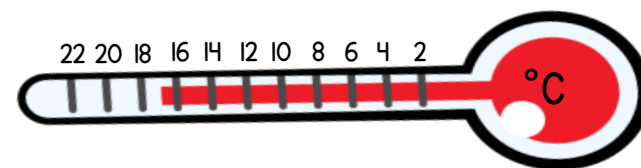
C

D

A

1 mark

- 12 The thermometer shows the temperature in London in May.



In January the temperature was 20 degrees colder.  
What was the temperature in London in January?

-3  $^{\circ}\text{C}$

1 mark

Circle how confident you feel with place value.

1 2 3 4 5  
Not confident Very confident